




## Number lines: fractions

Place the point on the number line as instructed



Place point B at  $\frac{2}{3}$



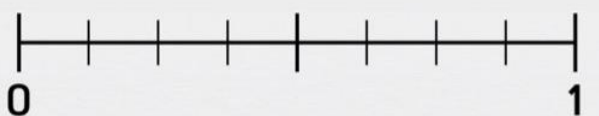
Place point X at  $\frac{1}{2}$




Place point Y at  $\frac{3}{4}$



Place point A at  $\frac{7}{8}$



Place point H at  $\frac{2}{8}$



Place point K at  $\frac{1}{8}$