




Understanding multiplication

Solve multiplication problems to fill in the blanks




=

Stamps




=

Squares of
chocolate




=

Squares of
chocolate




=

Squares of
chocolate



=

Squares of
chocolate



=

Squares of
chocolate